

# Stage 3 Term 3 Week 1


Wednesday

# Literacy - Spelling





Look Cover Write Check your spelling words.

Complete an activity or two from the spelling rubric below.

This task should take 20-30 minutes.



Week 1 Words

		Seahorses 	Turtles 	Dolphins 	Stingrays 
OLD words	1	boat	plane	any	almost
	2	coat	late	many	water
	3	moan	state	anything	also
	4	coast	tape	anyhow	always
	5	soak	taste	anyone	bald
	6	throat	hate	anytime	already
	7		daze	anymore	appal
	8			anybody	walnut
New Sound		oe (as in toe) typically occurs at the end of words	“i-e” as in five	“le” as in table	“ar” as in warm
New Words	9	foe	fire	uncle	dwarf
	10	doe	white	jungle	warn
	11	tiptoe	inside	tremble	reward
	12	hoe	shine	tumble	war
	13	oboe	spine	crumple	awarded
	14	goes	drive	gargle	quart
	15		invite	freckle	warp
	16			crumple	towards

# Starfish and Sharks Groups



Starfish
ever
sister
splinter
silver
winter
her
herb
term
fern
perm

er (as in her)



u" as "j" in educate

Sharks		Spelling Bee Words	
1	educate	9	guaranteed
2	graduate	10	guillotine
3	grandeur	11	haemoglobin
4	Mandurah	12	hallucinate
5	residual	13	helium
6	residue	14	hesitance
7		15	humanitarian
8		16	imaginable

# Spelling (20 minutes)

Look Cover Write Check your words. Complete an activity from the Spelling Choice Board.

## Spelling Choice Board

Row 1	<b>Word Values</b> Use all spelling words. Write each spelling word and its value. Vowel= 2 points	<b>Word Scramble</b> Write all your words all scrambled up and give them to a family member to unscramble.	<b>Secret Agent Words</b> Convert 10 of your spelling words to a secret code. Use the "Secret Agent Words" sheet to complete this task.	<b>Mnemonic Sentence</b> Write a mnemonic sentence for 5 of your spelling words. Ex. Spelling word: <i>throw</i> <i>Ted has rented one</i> <i>wheelbarrow.</i>
Row 2	<b>ABC Order</b> Write all of your spelling words in ABC order or <i>reverse</i> ABC order.	<b>Spelling Synonyms</b> Use a thesaurus to write a synonym for each spelling word.	<b>Write It Right!</b> Write all of your spelling words 3 times each in your best handwriting.	<b>Highlighting</b> Use a highlighter to high- light either —all vowels, or —all consonants in all of your spelling words..
Row 3	<b>Stories and Poems</b> Write a story or poem. Use five or more spelling words in it. Underline each word.	<b>Spelling Word Find</b> Create a word find using the "Spelling Word Find" sheet. You may give it to a family member to solve.	<b>Make A Comic Strip</b> Make a comic strip using at least 10 of your spelling words. Use the "Create a Comic Strip" sheet to complete this task.	<b>Spelling Letters</b> Write a letter to a friend/ relative, in proper format, using at least 5 of the spelling words. Underline each word.
Row 4	<b>Flashcards</b> Create a set of flash- cards using the "Flashcards" sheet. Re- view your words with a family member.	<b>Memory Match</b> Write your spelling words on cards (make 2 sets) and play "Memory Match" with a family member. You may use "Flashcards" sheet.	<b>Practice Test</b> Go to <a href="http://www.spellingcity.com">www.spellingcity.com</a> . On the left, enter TEN of your spelling words. Click on "Teach Me" and follow the di- rections. Then, click on "Test Me" and follow the directions.	<b>Pyramid Write</b> Pyramid TEN of your spelling words neatly. Example: Buzz B Bu Buz Buzz

# Read works and Read theory tasks:

Complete the task selected by your class teacher.

Make sure you read through the article carefully.

If possible discuss with your parents any vocabulary/words you are unsure of before you answer the questions.

This should take you roughly 30-40 minutes.

# Fruit Break/ Brain Break:

Grab a piece of fruit or have a 10 minute break to go outside reset, refresh and restart.



# Writing - Grammar: Prepositions

Watch the video on prepositions

<https://www.youtube.com/watch?v=oV5xwP5E9qU>

Write 5 sentences with prepositions in them about people or animals that are in your home.



Today we are going to learn about:  
**Prepositions**



# Focus :Descriptive writing



Can you continue the story of Batman's evening off?

Does it turn out to be relaxing or does he have to go out and save lives?

Who is on the end of the phone?

Gotham City (where Batman lives) is a place where everyone always seems to be sad or in trouble.

Do you think that in our world there is more happiness or sadness?

Remember to include an effective use of prepositions throughout your text.

# Batman stimulus:



# Handwriting / Typing:

As part of the curriculum we need to learn how to effectively type and use digital technologies. Google Typing Club and take their placement test then complete one or more of the lessons. This should take 20 -30 minutes.



# Lunch break-Break 1

Enjoy the 30 minute lunch break with your family.

Try to eat something healthy and drink some water.



# Numeracy: Numeracy Ninjas

**Week 1 : Session 2- Wednesday**



# Numeracy Ninjas: Complete the questions below you have 5 -10 minutes


**MENTAL STRATEGIES -**  
do these in your head

Q	Question	Answer
1	$\square + 7 = 10$	
2	What is double 1?	
3	Halve 92	
4	$166 + 80 = \square$	
5	$108 + \square = 110$	
6	$11 + 14 = \square$	
7	$5 = 2 + \square$	
8	$16 + 9 = 16 + 4 + \square$	
9	$6 + 333 = \square$	
10	$43 + 58 = 40 + 50 + \square$	
Total out of 10		

**TIMESTABLES -**  
do these in your head

Q	Question	Answer
1	$\square \times 10 = 100$	
2	$20 \div 10 = \square$	
3	$\square \times 7 = 28$	
4	$\square \times 10 = 40$	
5	$48 \div \square = 8$	
6	$49 \div 7 = \square$	
7	$7 \times \square = 70$	
8	$30 \div 3 = \square$	
9	$5 \times 10 = \square$	
10	$6 \div 2 = \square$	
Total out of 10		

**KEY SKILLS -** you may use written calculations for these questions

Q	Question	Answer
1	$729 \div 9 = \square$	
2	$7 + 4 \times 2$	
3	$6.51 \div 0.5$	
4	$1000 \times 4.06$	
5	$80 - 6.55$	
6	Write $\frac{3}{6}$ in its simplest form	
7	Difference between $-9$ and $-2$	
8	Value of the dot 	
9	What is the positive square root of 81?	
10	What is 105% of £20?	
Total out of 10		

# Maths Warm up tasks:

The goal is to arrive at the number below (or as close as possible).

419

You can use the four basic arithmetic operations (+, −, × and ÷) applied to the six numbers.  
Each number may be used once.

75

100

50

100

8

3

Based on the TV show "Letters and Numbers", showing on SBS in Australia.

Instructions from [Wikipedia](#).



# Maths -Whole Number

WALT- read, write, order and compare numbers up to 1 000 000.

- round any number up to 1 000 000 to the nearest 10, 100, 1000, 10 000 and 100 000.





# Whole Number-Rounding

Review yesterday's lesson.

Write down a short list of your top tips for rounding numbers to different values.

Think about the steps you need to follow. What digits should you focus on? How can you tell whether to round up or down?

10 minutes



# Whole Number: Rounding Numbers

Look at the next two slides, on each slide there are two possible rounded answers (on the left and right of the slide).

Record the answer that you think is correct and give a reason for this answer.



Brain Break:



**Create an obstacle course using objects  
in your backyard.**

Who can complete the obstacle course in the fastest time ?

# Whole Number : Rounding

## Round and Round!



Use your estimating and rounding skills to choose the correct total.

The table below shows the amount of views a video on YouTube has over 4 weeks.

What is the total amount of views?

Week	Number of Views
1	153
2	231
3	269
4	113

636

766

# Whole Number :Rounding

## Round and Round!



Use your estimating and rounding skills to choose the correct total.

The table below shows the amount of views a video on a gaming website has over 4 weeks.

What is the total amount of views?

Week	Number of Views
1	1721
2	1092
3	3634
4	3611

10 058

10 558

# Whole Number :Rounding

Check In Cards



- 1 The table below shows the amount of passengers who travelled to Dublin during four days.

Day	Number of Passengers
Monday	98
Tuesday	45
Wednesday	123
Thursday	154

The total amount of passengers was 420.

Is this correct? Use rounding to help you check the answer.

Check In Cards



- 2 On a flight to Madrid, the following meals were ordered.

Food	Amount of Dishes Ordered
Cottage Pie	257
Chicken Sandwich	374
Snack Pack	852
Soup	346

The total amount of dishes ordered was 1629.

Is this correct? Use rounding to help you check the answer.

# Whole Number :Rounding

## Check In Cards



- 3 The Airline was to give information to its passengers on its latest destination, Iceland.

Place	Population
Reykjavik	429 049
Akureyri	385 590
Egilsstaðir	254 020

The total population of the towns is 1 068 659.

Is this correct? Use rounding to help you check the answer.

## Check In Cards



- 4 A passenger bought 3 items during a flight; a teddy \$3.50, a model airplane \$2.20 and a neck pillow \$4.30. She paid with a \$20 note and received \$9.00 change.

Did she receive the correct amount of change? Use rounding to help you check the answer.

# Whole Number : Rounding

## Check In Cards



- 5 The table shows the amount of different films viewed during a flight to Los Angeles. Michael, the chief host, stated "If I rounded the amount of films viewed to the nearest 100, then 900 films were viewed."

Destination	Films watched
Los Angeles	845

Is he correct?



## Check In

I can use rounding to solve problems.



Question	Correct or Incorrect? (tick if correct or cross if incorrect)
1	
2	
3	
4	
5	



# Whole number: Rounding Numbers-Word Problem


## Check Mate

We are going to use rounding to check the answer to this question.

Jacqui has a shop that sells knitted hats and scarves. Here is the shop's profit for the last 6 months.

Her manager says the shop has not made \$4500 profit.  
Is her manager correct?

Would you round to the nearest 100 or 10 to check?



Journey	Profit
1	1178
2	867
3	362
4	587
5	902
6	289

# Break 2: 30 minutes

Go outside.

Take this opportunity to run around outdoors.

Recharge and have a quick bite to eat so that you don't become tired and irritable while you are sitting and working.

Drink plenty of water as well.



# PD/H/PE:

Think of how you used a strength of yours, to achieve something today.

An example might be; I used my great writing skills to create an awesome narrative  
or I then read this to my baby sister, and it made her smile

I used my strength of \_\_\_\_\_ to...



# Olympics 2021:

Read through the following slides.

Select one of the sports mentioned in the slides and make a modified version of it for you and your family.

For example; triathlon- go on a run/bike ride with your family.

Beach volleyball- use a ball of balloon outside and see how many times you can keep it up in the air without it bouncing or touching the ground.

Skateboarding-use your skateboard or toy skateboard and practice your tricks.

# Tokyo, Japan

- Tokyo is the bustling capital city of Japan.
- The greater metropolitan area of Tokyo has more than 37 million residents; the most populous metropolitan area in the world.






# Tokyo 2021 Venues



Japan National Stadium



Tokyo Metropolitan Gymnasium



Ariake Gymnastics Center



The Musashino Forest Sports Plaza



# Tokyo 2021 Events

- **47 different sports:**
  - Many traditional summer games sports that we are all familiar with such as track and field, gymnastics, swimming, diving, and cycling.
  - Some lesser known: Fencing, beach volleyball, water polo.
  - New sports for 2021: Surfing, Sport Climbing, skateboarding, Karate, baseball, and softball.
  - Sports are split into women's competitions and men's competitions



# Sport Highlight: Triathlon

The Triathlon event involves three different sports: swimming, cycling, and running.

First the competitors swim 1500 meters, which is just under a mile, then they quickly transition to their bikes and ride for 40 km (about 25 miles). Finally, they hop off their bikes and run 10 km (6.2 miles).

This competition is considered an endurance sport, so the athletes must be in excellent cardiovascular shape. When training they often combine 2 of the 3 sports into one workout.





# Sport Highlight: Beach Volleyball

First debuted in the Atlanta Olympics in 1996

Unlike traditional volleyball, only two players are on each team. Beach Volleyball is played on a sand surface, hence the name Beach Volleyball.

Competition is won by winning the best of three sets. Each set is 21 points, and the first team to get to 21 wins that set.

